

NOMBRE _____

8.

10

12

15

20

9.

23

24

27

30

10.


16

17


19

27


11.



12.



13.



14.

$$\begin{array}{r} 6 \\ + 4 \\ \hline \end{array}$$

15.

$$\begin{array}{r} 12 \\ - 9 \\ \hline \end{array}$$